



AAKAR PUBLIC SCHOOL

Summer
holiday
Homework

Student Name: _____

Class: II

Session: 2026-27



Dear students,

'Summer vacation is the most awaited time for parents and kids alike. However ,this time it is different due to COVID-19 as youngsters are already not going to school. Thus ,our responsibilities get double to keep our children active.

The objective of holiday homework is to enable our toddlers work independently and also to improve their academic skills.

We hope your homework and activities will be well managed and presented so that all of you earn a golden star as a grade.

We wish you a wonderful time ahead!!!

Good habits and good manners are life long assets and manners must be practiced until they become a habit.

Four magic words that are basic of good manners are :- Please, Thank you, Excuse me and Sorry. Make these four words a habit and see the difference.

HYGIENE:-

***Brush your teeth twice a day.**

***Do trims your nails often.**

***Do not waste water and electricity.**

***Keep your surrounding and environment clean. It is a bad habit to throw things out of the window, car or a balcony.**

***Make friends having good habits who respect their elders and use good language.**

NOTE-The school will remain closed from 01.05.2026 to 30.06.2026 and will reopen on 01.07.2026 . Summer holidays homework has been uploaded on our school **App: Edunext and WhatsApp group** kindly go through it. The marks of holiday homework will be included in your Term-1 exam. Kindly deposit the holiday homework in July 1st week, later it will not be accepted by the class teacher.

SUBJECT : ENGLISH



Write five sentences about your favourite season.

1. _____ .
2. _____ .
3. _____ .
4. _____ .
5. _____ .

Write the plural form of the given nouns:-

Singular

Plural

Book

Shop

Bush

Dish

Cherry

Fox







Box

Peach

fruit word search

1. Write the name of the fruit in the space provided.
2. Find the word in the word search puzzle.
(Words only run across and down.)

s	t	r	a	w	b	e	r	r	y
o	r	a	n	j	e	p	e	a	r
r	m	e	h	o	a	e	w	n	a
a	b	a	b	a	n	a	n	a	p
n	x	p	a	i	r	c	e	y	p
g	r	a	p	e	s	h	k	a	l
e	p	i	n	e	a	p	p	l	e



ACTIVITY -1


Water is precious! Save every drop.

No water, No life,

No blue, No Green.

To understand the need and importance of water, Create a pictorial depiction on ways to conserve water on A3 Sheet.

Link for the activity -



<https://www.youtube.com/watch?v=OmatT86AWoQ>

ACTIVITY-2

INGENIOUS



Let your creative juices flow..!!!.Create a masterpiece which is a usable item or an artistic presentation from waste material at home. Take assistance from your parent to complete the activity. The list of the items to be prepared is endless but just a few examples are as follows:-

Eg- Pen holder, wall hanging, file folder, bird feeder etc. Links for the activity –

<https://www.youtube.com/watch?v=kqbVGkYBnk8>

<https://www.youtube.com/watch?v=VMM9Pj4H95k>

<https://www.youtube.com/watch?v=h7mKoS1xRZA>

ACTIVITY- 3

YOGA



The art of practicing Yoga helps in controlling an individual's mind, body and soul. It brings together physical and mental disciplines to achieve a peaceful body and mind. It also helps in increasing flexibility, muscle strength and body tone.

Yoga is fun

**Yoga is fun Try
this pose**

**Try this pose The
sun salutation**

**The sun salutation Just
breathe in**

Just breathe out....

Likewise..... Write a song/rhyme on Yoga on A4 sheet

Dear children,

Kindly click on the following links given below to listen to the interesting and moral stories:-

<https://youtu.be/zTk7G73kbHo>

<https://youtu.be/CWSYyAC0EqM>

<https://youtu.be/aTi5dbVmUhU>

CURSIVE WRITING

an ant air apple

an ant air apple

an ant air apple

bat ball butterfly

bat ball butterfly

bat ball butterfly

cat car cup card

cat car cup card

cat car cup card

SUBJECT : HINDI

प्रश्न १ - चित्र देख कर तीन - तीन पर्यावर्षिणी शब्द लिखो-













प्रश्न २ दिए गए चित्रों को देखकर यह पहचानिए कि वे किस भाषा के रूप से संबंधित हैं और लिखिए।

मौखिक भाषा

लिखित भाषा



प्रश्न ३ शब्दों को चित्रों से जोड़कर मुहावरे बनाइए।

घी के



गले का

ईद का



आँखों का



1. निम्नलिखित में से किस वाक्य के सबसे अधिक शब्दों में 'अनुस्वार' का प्रयोग हुआ है?

- हिंदी वर्णमाला में संयुक्त व्यंजनों की संख्या चार है।
- मुझे ये सभी व्यंजन पसंद हैं।
- संयुक्त व्यंजन दो व्यंजनों को जोड़कर बनते हैं।
- इस वाक्य में रेखांकित और रंगीन शब्दों के अर्थ बताइए।

2. मुख से निकली ध्वनियाँ ही _____ बनती हैं।' इस वाक्य में रिक्तस्थान की पूर्ति निम्नलिखित में से किन शब्दों से की जाएगी?

- शब्द
- भाषा
- अनुनासिक
- अनुस्वार

3. जिस ध्वनि के टुकड़े न हो सकें, उसे _____ कहते हैं।' इस वाक्य में रिक्तस्थान की पूर्ति निम्नलिखित में से किन शब्दों से की जाएगी?

- वर्ण अथवा शब्द
- शब्द अथवा अक्षर
- वर्ण अथवा अक्षर
- स्वर

4. 'कल्पना' शब्द की रचना निम्नलिखित में से किन ध्वनियों के प्रयोग से हुई है?

- क् + अ + ल + प् + अ + न् + आ
- क् + अ + ल् + प् + अ + न् + आ
- कू + अ + लू + प + अ + न् + आ
- कू + अ + लू + प् + अ + न + आ

5. 'भारत' शब्द की रचना निम्नलिखित में से किन ध्वनियों के प्रयोग से हुई है? सही विकल्प का चुनाव कीजिए।

- भू + आ + र् + अ + त् + अ
- भ + आ + र् + अ + त् + अ
- भू + आ + र + अ + त् + अ
- भू + आ + र् + अ + त + अ

रचनात्मक कार्य

एक रंगीन चार्ट पर महीनो ओर दिनों के नाम लिखे और उसमे अपने घरवालों का जन्मदिन भी लिखे



Link for the activity ideas -

<https://www.youtube.com/watch?v=a1e0R72oHaQ>

<https://www.youtube.com/watch?v=o0LH3uP2Uw>

कहानी <https://www.youtube.com/watch?v=5VqVytB6m7Q>

भाषा का ज्ञान <https://www.youtube.com/watch?v=6Eh5L9knGD0>

SUBJECT : MATHS

Q1. Complete the following questions from the given hints:-

162	328	273	184
680	204	127	95
755	827	951	616

In the table, Can you find?

A number between 100 and 150	
A number between 900 and 1000	
A number smaller than 100	
A number between 300 and 400	
A number that has 6 tens	
A number that has 5 ones	
A number that has 6 hundreds.	
A number that has 2 digits the same.	
A number with no tens	

Q2. Write the smallest and greatest number in each set and Arrange them in Ascending order:-



	Smallest	Greatest	Ascending order
1,3,5,4			
3,0,7,2			
9,8,5,1			
6,7,4,0			
5,9,2,1			
3,6,10,8			

Q3. Fill in the blanks with <, > or =.

a) 116 ____ 142

b) 233 ____ 147

c) 203 ____ 349

d) 382 ____ 209

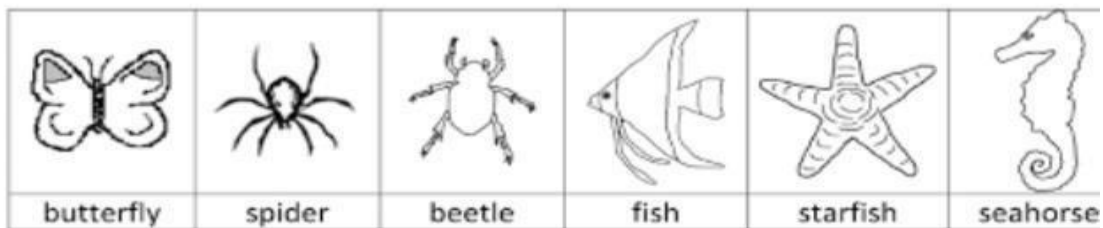
e) 232 ____ 109

f) 159 ____ 240

g) 304 ____ 110

Q4. Ordinal Numbers. Write the answer and color them:-

ORDINAL NUMBERS – FIND AND COLOR 5



If the butterfly is the first animal...

- 1) Which animal is fourth? _____
- 2) What place is the starfish in? _____
- 3) What place is the spider in? _____
- 4) Which animals is 3rd? _____
- 5) Which animal is last? _____
- 6) Color the second animal red.
- 7) Color the fourth animal orange.
- 8) Color the first animal yellow.
- 9) Color the 5th animal blue.
- 10) Color the third animal black.
- 11) Color the 6th animal green.

Q5. Write the place value of the underlined digit of the given numbers:-

<u>1</u> 54	<u>50</u>	4 <u>4</u> 7	<u>7</u>	<u>8</u> 43	<u>800</u>
3 <u>4</u> 5	_____	<u>8</u> 94	_____	3 <u>3</u> 4	_____
6 <u>7</u> 4	_____	<u>2</u> 53	_____	4 <u>4</u> 6	_____
4 <u>5</u> 1	_____	<u>3</u> 76	_____	<u>6</u> 25	_____
8 <u>5</u> 5	_____	54 <u>2</u>	_____	<u>1</u> 68	_____
<u>3</u> 69	_____	<u>1</u> 64	_____	7 <u>3</u> 8	_____
<u>4</u> 09	_____	3 <u>8</u> 9	_____	<u>7</u> 99	_____
<u>7</u> 07	_____	<u>3</u> 28	_____	8 <u>4</u> 8	_____

Q6. BRAIN TEASER

110	809	436	999	429	545	677	500
390	981	541	234	123	632	549	899

Find the numbers from the grid given above:-

(i) A number in which all the digits are same.

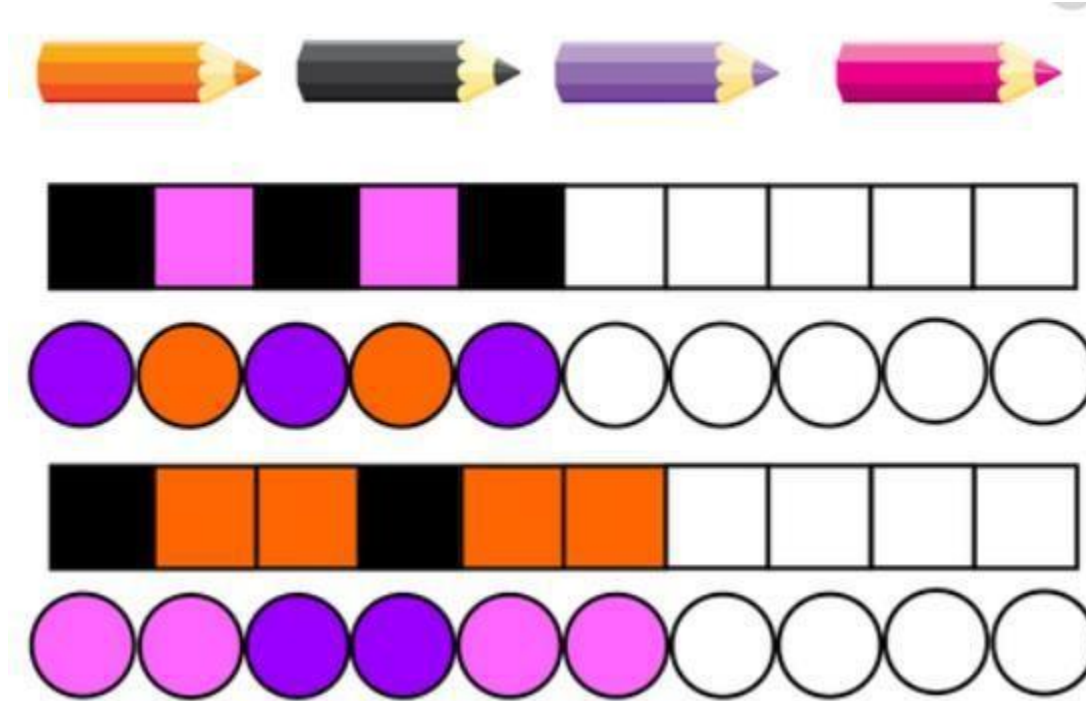
(ii) A number that has 6 in the hundred's place.

(iii) A number in which the digit in hundreds house and ones house is same.

(iv) A number that comes between 109 and 111.

ACTIVITY (1)

MATHEMATICS MAGICAL FUN!!!!



* Prepare a pattern on any one of the given below:-

- i) A picture pattern
- ii) A number pattern
- iii) A poem on numbers

ACTIVITY-2

FAMILY BIRTHDAYS



Record the birthdays of your family members in a scrap book. The birthday should be in ascending order of age (youngest numbers of the family to the eldest member of the family.) Also paste pictures of your family member.

Link for the activity -

<https://www.youtube.com/watch?v=nghKU-JbVj8>

Class-II
SUBJECT : EVS

All About Myself

Complete the chart about yourself:



I live with _____
I have _____ sisters
and _____ brothers



My friend's name
is _____

I live in _____
It is a _____ city



My name is _____
I am _____ years old.

My hobbies are

My favourite pet
is _____



My favourite subjects at
my school are

Sense organs:

Choose and fill in the blanks with the correct sense organs from the words given below.

Nose

Tongue

Eyes

Ears

Hands



I can touch with my _____



I can see with my _____



I can hear with my _____



I can taste with my _____



I can smell with my _____

Explore your Five Senses

In each box, draw a line to match the object to the correct word describing the sense.

Sense of Taste

sour

salty

mild

bitter

spicy

sweet



Sense of Smell

minty

citrus

fruity

rotten

smoky

fragrant



Sense of Sight

small

shiny

dark

pale

colorful

dotted



Sense of Touch

rough

hot

soft

silky

prickly

bumpy



Sense of Sound

quiet

soft

silent

shrill

low

faint



CLOTHS WE WEAR IN DIFFERENT SEASON

Write the name of the given cloths with the help of given box.



1. _____



2. _____



3. _____



4. _____



5. _____



6. _____



7. _____



8. _____



9. _____



10. _____



11. _____



12. _____

Dress

Jacket

Blouse

Shoes

Shirt

Cap

Skirt

Tie

Belt

Trousers

T-shirt

Socks

ART & CRAFT



Activity 1

The Paper house

Competency- Creativity, Collaboration Dear

Kids

The shape, size and material used in the construction of house has changed over the years. Spend time with your grandparents and discuss with them about the difference in the type of house that you live in now and the type of house , they used to live in ,when they were of your age.

Make an attractive 3D Model of the allotted house by reusing and recycling materials like newspaper roll, old cardboard sheets, colours etc with the help of your parents.



Type of House:-

- 1) Hut
- 2) House Boat
- 3) Sky scrapers or Multi story building
- 4) Tree house

Link for the activity -

<https://www.youtube.com/watch?v=wYf6bbp6qC8>

Activity 2


Make a 2D or 3D family tree using all possible waste material in the house cardboards, old plastic glass/plate used gift wraps etc. and paste/draw all the family members picture in it including grandparents, parents, uncle, aunts and cousins.

Link for the activity -

<https://www.youtube.com/watch?v=xgX7ErbBShU>



Note: Make a Video Call to your family members and tell them how much you love and miss them.



Explore the given link carefully

<https://www.youtube.com/watch?v=SUt8q0EKbms>

<https://www.youtube.com/watch?v=9nTUZNz49aU>

<https://www.youtube.com/watch?v=KsQoFK8G4pQ>

<https://www.youtube.com/watch?v=QG4U3xh>

Body Parts

Sense Organs

Internal and External Organs

Animal World

ACTIVITY -3

YIN AND YANG (YOGA)



Yin and Yang are the Taoist concepts which describe the two relative qualities in present in everything. Yin is more internal, cooling, passive and downward. Yang is more external, dynamic, warming and upward. When these terms are applied in yoga, Yin Yoga is a slower practice where poses are passively held for longer.

Creative Coloring

Draw and colour your favourite yoga postures in stick drawing style in your scrap file and YIN and YANG symbol on A-3 sheet.

You can take help by clicking on the given link below for different yoga postures: -

<https://youtu.be/YGjVOTfQRX4>

<https://youtu.be/Fky9YEwDUvw>

Class - II

SUBJECT: COMPUTERS

Children, we learn about uses of computer. Here are some questions based on the various uses of computer. Answer the following questions.

Q1. Choose the correct answer: -

1. Which of the following is true about computer?
 - (i) Computer can run
 - (ii) Computer can sing
 - (iii) Computer can eat
 - (iv) We can type on a computer

2. The full form of PC is
 - (i) Process Computer
 - (ii) Private Computer
 - (iii) Personal Computer
 - (iv) Perfect Computer

Q2. Write True and False: -

1. A desktop computer needs a battery ()
2. A computer can be used to design clothes ()
3. A computer can take its own decision ()
4. Computers are used in banks to keep records of the customers and their accounts ()

Q3. Answer in one word or a sentence:-

- A. Computer can store a large amount of
- B. A computer can be used to book
- C. We can use a computer to draw
- D.are smaller than desktop computers but larger than tablets.

Q4. Look at the pictures and write what are they doing on a computer?



A.



B.



C.

Q5. Write two uses of computer at school.

.....
.....


Q6. Write two places where you have seen a computer.

.....
.....

HANDS ON ACTIVITIES FOR COMPUTERS

Activity 1: Collect the pictures of computer peripherals and paste them on a A4 size coloured sheet with a Title "Computer peripherals" at the top and a beautiful border round the edges.

Activity 2



MUSIC

Have to learn this and prepare video and send it to the class teacher

1. Gyatri Mantra
2. Song - Chal re Sathi Chal

DANCE

Have to prepare dance on this song and record the video and send it to the class teacher.

- Guru Vandana - Guru Bharna Guru Vishnu Guru Devo Maheshwra

Note:-

- * *Holiday Homework needs to be done in neat handwriting.*
- * *Activities should be presented beautifully with excellent creativity.*
- * *Holiday Homework is mandatory to be done by all the students within the stipulated time.*
- * *Holiday Homework will be evaluated in overall result.*

Happy Holidays !!!

Holiday Homework Marks Distribution

S.No.	Subject Name	Maximum Marks	Obtained Marks	Teacher's Signature
1	English	5		
2	Hindi	5		
3	Mathematics	5		
4	EVS	5		
5	Computer	5		

Note:

The Holiday Homework of each subject carries ****5 marks****, which will be included in the ****Term-1 Internal Assessment (IA)**** category. Students are advised to complete their work neatly and submit it on time